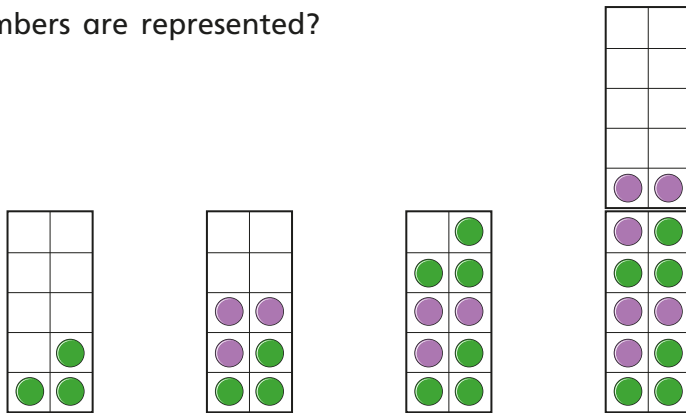
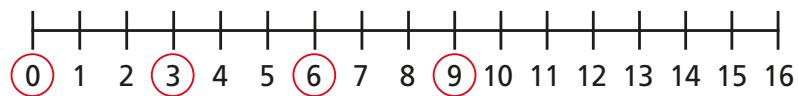


1 What numbers are represented?



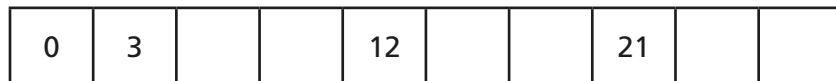


2 Use the number line to help you complete the sentence.




The numbers that are circled are counting up in steps of

3 Complete the number tracks.



4 Rosie has 12 stickers.



She collects 3 more stickers each day.

How many stickers will she have in 8 days?

5 Is each statement true or false?

a) When you count in 3s from zero, you will say the number 9

b) When you count in 3s from zero, you will say the number 11

How do you know?

6 Count up in 3s from 3

Colour the numbers you say on a number grid.

7 Complete number tracks to show the numbers the children will say.

a) Ron is counting in 2s from zero.

b) Kim is counting in 3s from zero.

c) Whitney adds Ron and Kim's numbers together.

d) What do you notice about Whitney's number pattern?