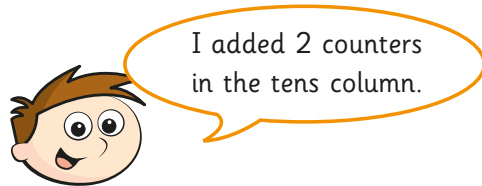


1 What is the number represented on this place value chart?

TTh	Th	H	T	O

a) Write the number in numerals and words.

b)



What number has Teddy made?

2 Nijah has made this number on a place value chart.

TTh	Th	H	T	O

a) Write the number in numerals and words.

b) Nijah adds 2 counters to the thousands column, and 1 counter to the tens column.

Write Nijah's new number in numerals.

3 Draw counters on a place value chart to represent each number.

a) 416 b) 22,305

4 Complete the bar models.

a)

67,611	
67,000	

c)

78,319	
8,000	

b)

50,000	470

d)

93,406	
	400

5 Complete the number sentences.

a) $42,000 = \square + 2,000$

b) $17,250 = 10,000 + \square + \square + 50$

c) $20,455 = \square + \square + \square + \square$

d) $70,090 = \square + 10,000 + \square$

e) $50,641 = 40,000 + \square + \square + 341$





6 a) Write two 5-digit numbers that have a 6 in the thousands place.

b) Write two 4-digit numbers that have a 6 in the thousands place.

3 Draw counters on a place value chart to represent each number.

- a) 416 b) 22,305

4 Complete the bar models.



5 Complete the number sentences.

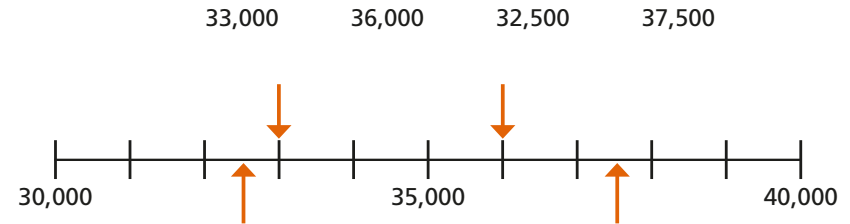
- a) $42,000 = \square + 2,000$
- b) $17,250 = 10,000 + \square + \square + 50$
- c) $20,455 = \square + \square + \square + \square$
- d) $70,090 = \square + 10,000 + \square$
- e) $50,641 = 40,000 + \square + \square + 341$

6 a) Write two 5-digit numbers that have a 6 in the thousands place.

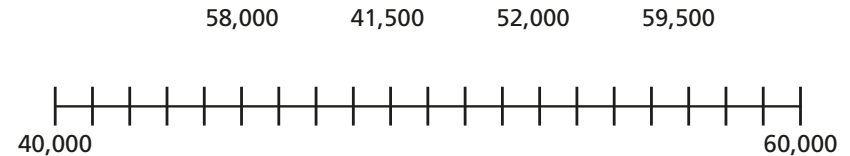
b) Write two 4-digit numbers that have a 6 in the thousands place.



7 a) Use these numbers to add labels to the number line.



b) Write these numbers on the number line.



c) Draw an arrow to estimate where the number 2,360 will be on the number line.

