



- 1 Here are 10 apples.



Circle 7 apples.

- 2 Here are 10 flowers.



Circle 4 flowers.

- 3 Colour 4 stars.




Compare answers with a partner.

- 4 Take 10 pencils or other objects.

Give 8 pencils to a partner.

How many pencils do you have left?

- 5 a) Circle 4 bees.



- b) Circle 5 counters.

