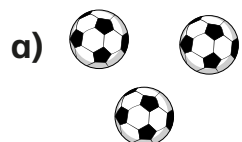


1 Write the missing phrase.


greater than

less than


equal to




is _____





is _____



is _____




is _____



is _____



2 Draw Teddy's counters.




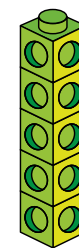
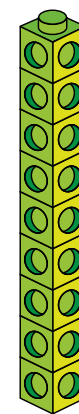
I have fewer counters than Annie.



Teddy

Is there more than one answer?

3 Make these towers with cubes.



Move 3 cubes to make the towers equal.